



Golden Days Universal School, Ozar

Assignment-III(Session 2020-21)

Class:6th

Subject: English.

- Q1) Write a notice to inform/instructed by the teacher to as the students of class X-A to bring their Hall ticket for the Board Exam daily.
- Q2) Write a short paragraph on (Any1).
- (I) God helps those who help themselves.
 - (II) Annual Day at school.
- Q3) Write a message to your father informing him about the call you received from his office informing about the urgent meeting at 9:00 Am tomorrow.
- Q4) Write a dairy entry on 'Save Water'.
- Q5) Write a letter to your principal requesting him/her to provide letter sports equipment in the school.
- Q6) Change the following sentences as directed:-
- (I) Mr Hari is a rich man. (Interrogative sent)
 - (II) Are you going to the garden? (Assertive sent)
 - (III) The jungle is very scary. (Exclamatory sent)
 - (IV) Come here, will you? (Imperative sent)
 - (V) This is our house. (Interrogative sentence)
- Q7) The pronouns used in the following sentences are wrong. Rewrite the correct sentences.
- (I) You should work himself.
 - (II) He is father than I
 - (III) To drink is a bad habit. She is a bad habit to drunk.
 - (IV) The town themselves is not very big.
- Q8) Change the following sentences into indirect speech.
- (I) He said to me, "How is your mother today" ?
 - (II) You said to him, "Don't worry about me".
 - (III) The judge will say, "You are free".
 - (IV) The teacher says, "The loin is a ferocious animal".
 - (V) The doctor said, "An apple a day keeps the doctor away".



Golden Days Universal School, Ozar

Assignment-III (Session 2020-21)

Class: VI

Subject: Science

Q.1. Very short answer type question.

- (a) State true or false -- Bones cannot be bent.
- (b) Name four different type of joint.
- (c) What is the function of skeleton in human body?
- (d) In a pivotal joint a cylindrical bones rotates in a ring-state true or false.
- (e) What is the function of rib cage?

Q.2.Short answer type question.

- (a) What is the hinge joint?
- (b) Why birds can fly?
- (c) What is the difference between bones and cartilage.
- (d) How body structure of camel helps it to survive in desert condition.
- (e) How are animals living in mountain regions adapted to the conditions there?
- (f) How are leaves of desert plants modified to reduce loss of water.
- (g) Explain at least any two types of joints with the help of diagram.
- (h) How fish swim in water?

Q.3.Long answers type questions.

- (a) Explain any two type of motion with the help of example.
- (b) How muscles work in movement of bones?
- (c) Why can we see our image in the mirror?
- (d) What are the differences between luminous and non luminous object.
- (e) If moon is non luminous, how it appears bright in night?
- (f) What is shadow? How it is formed?



Golden Days Universal School ,Ozar

Assignment-III (Session-2020-21)

Class: VI

Subject: S.S.T

[History]

Q.1.Very short answer.

- (a) Name an Upanishadi thinker whose mother was a slave.
- (b) Define Sangha..
- (c)What is dynasty?

Q.2. Short answer.

- (a) What were the questions that the Upanishadic thinkers wanted to answer?
- (b) Write a short note on the life of Lord Buddha,
- (c) Why is the Mauryan Empire said to be the first empire of India?

Q.3. long answer.

- (a)What were the main teaching of Mahavira?
- (b) How is an empire different from a kingdom?
- (c) Name the iron tools that were used in agriculture during and after the Later Vedic Period
What were their uses?.

[Civics]

Q.1.Very short answer.

- (a)Who maintains land records and collects revenue at the village level?
- (b) Mention some compulsory functions of the Municipality.

Q.2 Long answer.

- (a) What are the various functions of a Municipal Corporation?
- (b) What are the sources of income of a Nagar Panchayat?

[Geography]

Q.1. Draw and label the Biosphere.

Q.2. With the help of diagram explain the Volcanic Mountains.

Q.3.What is the composition of the air?

Q.4. Difference between the lithosphere and the atmosphere.

Q.5. What are the importance of mountains and plateaus?





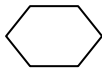
Golden Days Universal School ,Ozar

Assignment – III (Session 2020-2021)

Grade – VI

Subject- Mathematics

1. Give two examples of each of the following shapes.(a) cone (b) sphere
2. Find the sum of interior angles of a pentagon.
3. One of the angles of a triangle is 120° and the other angles are equal. What is the measure of each of these angles?
4. Complete the following table classifying each curve as simple, closed or polygon.

| Curve | Simple | Closed | Polygon |
|---|--------|--------|---------|
|  | | | |
|  | | | |
|  | | | |

5. What is the disadvantage in comparing line segments by mere observation?
6. Find the number of right angles turned through by the hour hand of a clock when it goes from: (a) 3 to 6 (b) 2 to 8
7. Which direction will you face if you start facing
(a) East and make $\frac{1}{2}$ of a revolution clockwise?
(b) East and make $1\frac{1}{2}$ of a revolution clockwise?
8. Write down the measures of (give at least two examples).
(a) Acute angles (b) Obtuse angles (c) Reflex angle
9. Define triangle. Classify triangle on the basis of:
(a) sides (b) angle
10. What shape is
(a) Your instrument box
(b) A match box
(c) A road-roller



Golden Days Universal School, Ozar

Assignment-III(Session 2020-21)

Class:VI

Subject: Hindi

• निम्नलिखित शब्दों के उत्तर लिखो ।

- (1) तत्पुरुष समास की परिभाषा पाच उदहारण सहित लिखो ।
- (2) द्वंद्व समास के पाच उदहारण पूर्वपद उत्तरपद तथा समास विग्रह लिखो ।
- (3) द्विगु समास की परिभाषा उदहारण सहित लिखो ।
- (4) संज्ञा किसे कहते है ? उदहारण सहित लिखो ।
- (5) संज्ञा के भेद कौन कौन से होते है ?
- (6) जातिवाचक संज्ञाओं के पाच उदहारण लिखो ।
- (7) दिए गए शब्दों से भाववाचक संज्ञा बनाओ ।
दास, कारीगर, ठग, चोर, सज्जन
- (8) सर्वनाम द्वारा भाववाचक संज्ञा बनाओ ।
निज, आम, अपना, मम
- (9) लिंग की परिभाषा लिखो ।
- (10) लिंग के भेद लिखो व भेदों की परिभाषा लिखो ।
- (11) निम्नलिखित पुल्लिंग शब्दों के लिंग बदललिए ।
देवर, सत्यवान, लाला, इंद्र
- (12) वचन किसे कहते है ? इसके भेद कौन कौन से होते है ?
- (13) निम्नलिखित शब्दों के वचन बदललिए ।
माला, शरण, लकड़ी, वाहन, पक्षिवृंद